




CSD Enrichment Menu K-2-Week of June 1

Color in the box once complete. Links are underlined or in blue. Have Fun!

What is down in the dirt? Read along with author Kate Messner as she reads [Up in the Garden and Down in the Dirt](#), [here](#) and try her writing challenge!




Knock, Knock; Who's Under that Rock


Bugs, slugs, worms and dirt. What's living under there?!? Map your animal discoveries as you look under rocks. Download the [activity sheet](#) to get started with mapping out an entire world of bugs.





Start a nature journal and go on a nature walk [here](#) and learn about how to identify spring wildflowers. Do you know what Dutchman's Breeches look like or types of leaf patterns? Record or draw what you learned in your journal and don't forget labels.



What is the value of the triangle?



Choose one box in this picture that you don't think belongs with the rest. Explain why. Can you pick another box and give a different reason?



How many words can you make out of the letters in **SUMMERTIME** [here](#). Can you find a 6 letter word meaning the highest point on a mountain or a 4 letter word for a reddish-brownish color?



Use four of these dominoes to form a square with the same number of dots on each side.




FREE!

What is the value of the last row?

$$\begin{aligned} \text{Ice cream cone} + \text{Ice cream cone} + \text{Ice cream cone} &= 9 \\ \text{Cupcake} + \text{Ice cream cone} + \text{Ice cream cone} &= 13 \\ \text{Cupcake} + \text{Cupcake} + \text{Ice cream cone} &= 22 \\ \text{Cupcake} \times \text{Ice cream cone} + \text{Ice cream cone} &= ? \end{aligned}$$

Enjoy [THE CSD Virtual Art Show](#). Look at art from all the schools. What are your favorites? Can you find a castle? Try your own [here](#).



Complete this SPRING to [Word Ladder](#).


Extra Challenge: Try making your own word ladder. Good Luck!



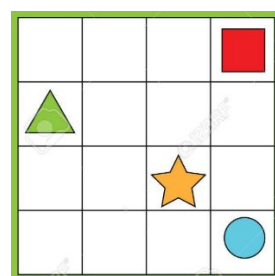
$$\begin{aligned} \text{Cat} + \text{Cat} &= 2 \\ \text{Cat} + \text{Cat} &= 6 \\ \text{Cat} + \text{Cat} &= 14 \\ \text{Cat} + \text{Cat} &= ? \end{aligned}$$

What is the value of the last row?

Complete the Spring [Crossword Puzzle](#)! (Extra challenge: try the puzzle with the word bank folded under) Have Fun!



Fill in the boxes with a shape so there is only one of each shape in each column or row.



How many hearts are there? How did you count them?



CSD Enrichment Menu K-2-Week of June 1

Have fun on your learning



adventure!